
— CALCULUS FOR THE LIFE SCIENCES I —

MAT1330 DGD WORKBOOK

- ◇ This workbook is intended for the personal use of students registered in MAT1330.
- ◇ You may print this workbook to bring to your DGD (or save a copy to use with a tablet).
- ◇ Select solutions will be presented during DGDs. **Note:** Your TA may not have time to cover all the exercises. Some TAs will be asked to solve additional problems which are not contained in this book so you should also bring some extra paper to your DGD.
- ◇ **Organization:** The book is divided into Lectures (based on the tentative course outline). After you've attended lecture n , you should be ready to tackle the problems in this book's section labelled LEC n . Exercises numbered with a section number and exercise number correspond to the course textbook *Calculus for the Life Sciences: Modelling the Dynamics of Life*, 2nd ed., by Adler and Lovrić. Other exercises are based on the Course Study Guide.
- ◇ This workbook is intended to be used along with the other course resources: your lectures, the Course Study Guide, your Möbius assignments, and the textbook.
- ◇ Topics in MAT1330 are best understood by solving a variety of problems. The theorems and definitions from your lecture notes will make more sense *after* you've spent some time working on a variety of concrete examples.
- ◇ Remember: on midterms/exams, you need to have practiced enough to solve problems *without* needing to consult your notes, *and* in a limited amount of time. Prepare yourself with plenty of math exercises.
- ◇ Last updated on July 22, 2021

◇ THIS BOOK BELONGS TO ◇

LEC 1 – High School Review.

1.3 # 20 Find the domain of $f(x) = \sqrt{2x - 7}$.

like 1.4 # 17 Find the formulas for the composition $f \circ g$ and $g \circ f$ and the product of the functions f and g ; simplify where possible.

$$f(x) = \frac{x - 1}{x + 1} \quad g(x) = 1/(2x)$$

1.4 #33 Sketch the graph, state the domain and range, decide if the function has an inverse and if so, find it: $f(x) = \sqrt[3]{x} + 4$.

2.2 # 24 Solve $4e^{2x+1} = 20$.

2.2 #26 Solve $4e^{2x+3} = 7e^{3x-2}$.

2.2 #32 Express $y = 0.27^x$ in base e . How do you transform the graph of $y = e^x$ to get the graph of $y = 0.27^x$?

2.2 #42 Solve $\ln(\ln(x)) = 0$.

LEC 2 – High School Review.

2.3 # 68 Graph the function. Give the average, max, min, amplitude, period and phase and mark them on the graph:

$$f(x) = 3 + 4 \cos \left(2\pi \left(\frac{x-1}{5} \right) \right).$$

Inequalities

Find all solutions to the inequality: $\frac{x+2}{2x-1} < \frac{1}{x+7}$.

LEC 3 – Intro to DTDS.

- 3.1 #2 Write the updating function f associated with the following DTDS, and evaluate it at the given arguments. Is it a linear DTDS?

$$m_{t+1} = \frac{m_t^2}{m_t + 2}; \quad \text{Evaluate } f \text{ at } m_t = 0, m_t = 8, m_t = 20.$$


- 3.1 #12 Write the updating function f associated with the following DTDS. Is it a linear DTDS?

$$M_{t+1} = 0.75M_t + 2$$

Determine the backward DTDS associated to the above DTDS. Use the backward DTDS to find the value M_0 (the value at the previous time step) given that $M_1 = 16$.


3.1 #18 & 22 Graph some values of the following DTDS, starting with the given initial condition:

$$l_{t+1} = l_t - 1.7 \quad \text{with initial value } l_0 = 13.1 \text{ cm}$$




Write down a formula for the general solution and sketch its graph. Sketch the graph of the updating function. Label the axes for each graph!

Graph of the general solution




Graph of the updating function




3.1 #19 & 23 Graph some values of the following DTDS, starting with the given initial condition:

$$n_{t+1} = 0.5n_t \quad \text{with initial value } n_0 = 1200$$




Write down a formula for the general solution and sketch its graph. Sketch also the graph of the updating function.

Graph of the general solution

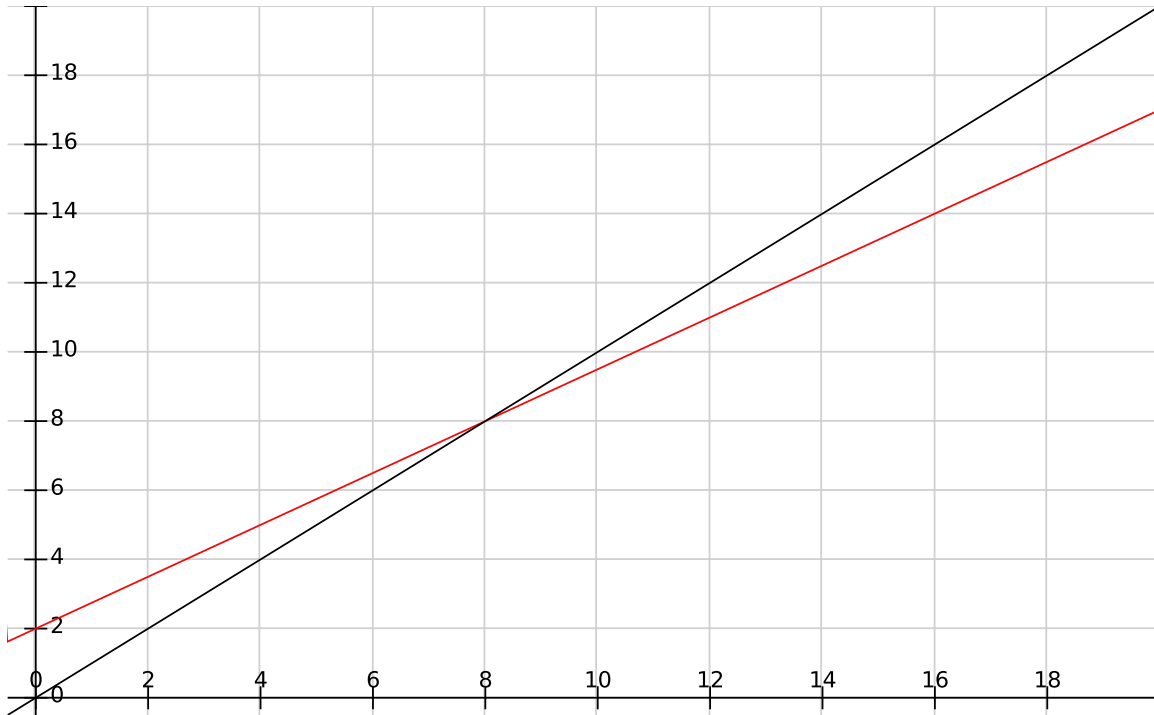


Graph of the updating function

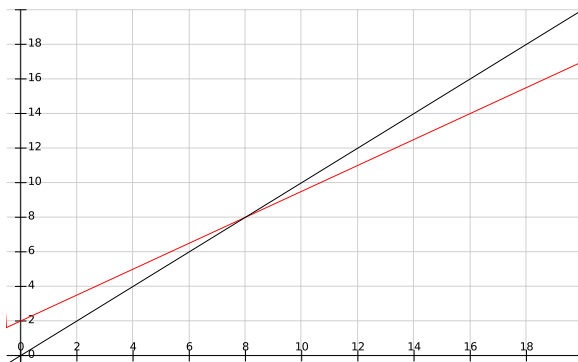


LEC 4 – Fixed Points and Cobwebbing.


- 3.2 like #6 Given the DTDS governing the daily dose of a drug, $M_{t+1} = 0.75M_t + 2$, do three iterations of a cobweb starting at $M_0 = 16$ mg/L. Then plot the solution you found this way on a graph of t vs M_t . Compare with the general solution formula we proved in class.




Cobweb diagram



Graph of the particular solution




3.2 #8 & 26 Graph the updating function underlying the DTDS $z_{t+1} = 0.9z_t + 1$. Then cobweb four steps, starting from $z_0 = 3$. Label the axes!



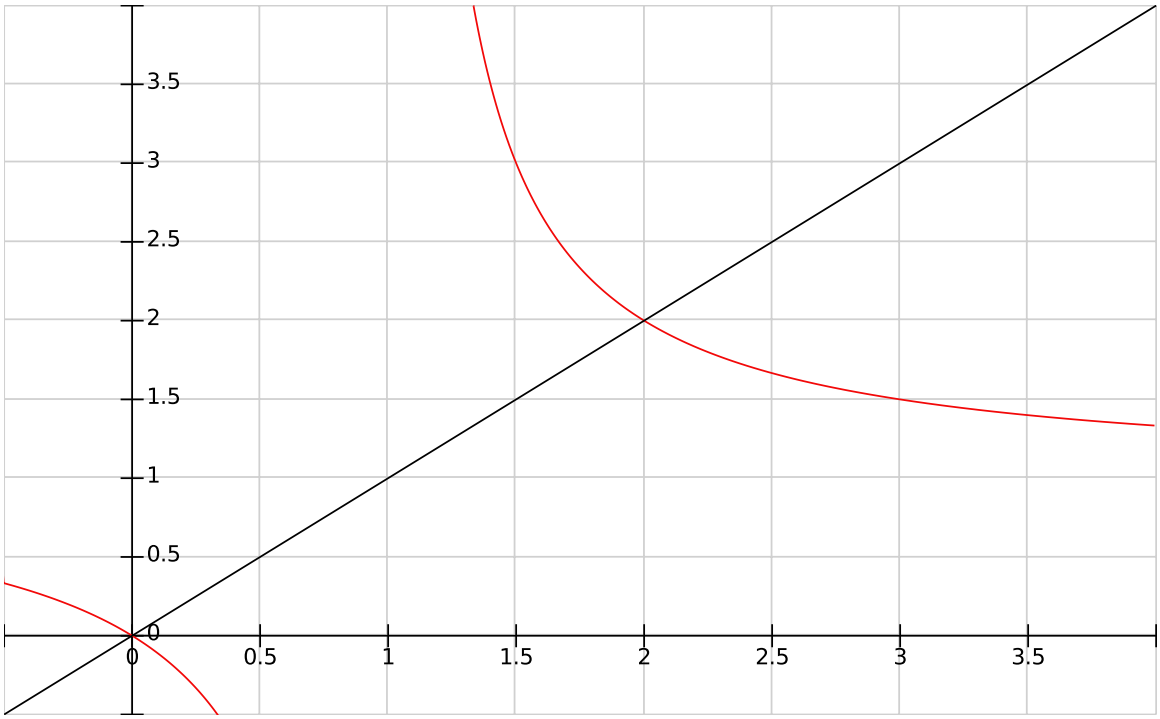
Next: solve for all fixed points, and classify their stability using cobweb diagrams.

Ex. Graph the updating function underlying the DTDS $z_{t+1} = 1.1z_t - 1$. Then cobweb four steps, starting from $z_0 = 3$. Label the axes!



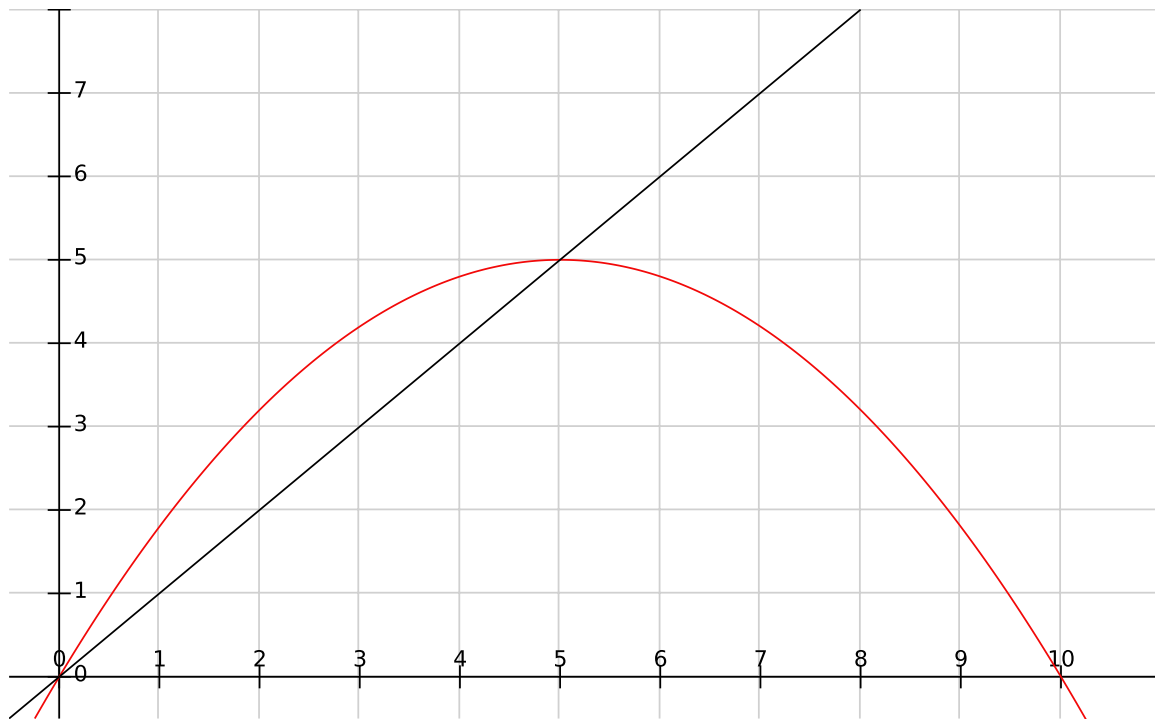
Next: solve for all fixed points, and classify their stability using cobweb diagrams.

3.2 #12 & 30 Using the graph of the updating function underlying the DTDS $x_{t+1} = \frac{x_t}{x_t - 1}$, cobweb four steps, starting from $x_0 = 3$. (Restrict your updating function to the domain $x > 1$.) Label the axes!



Next: solve for all fixed points, and classify their stability using cobweb diagrams.

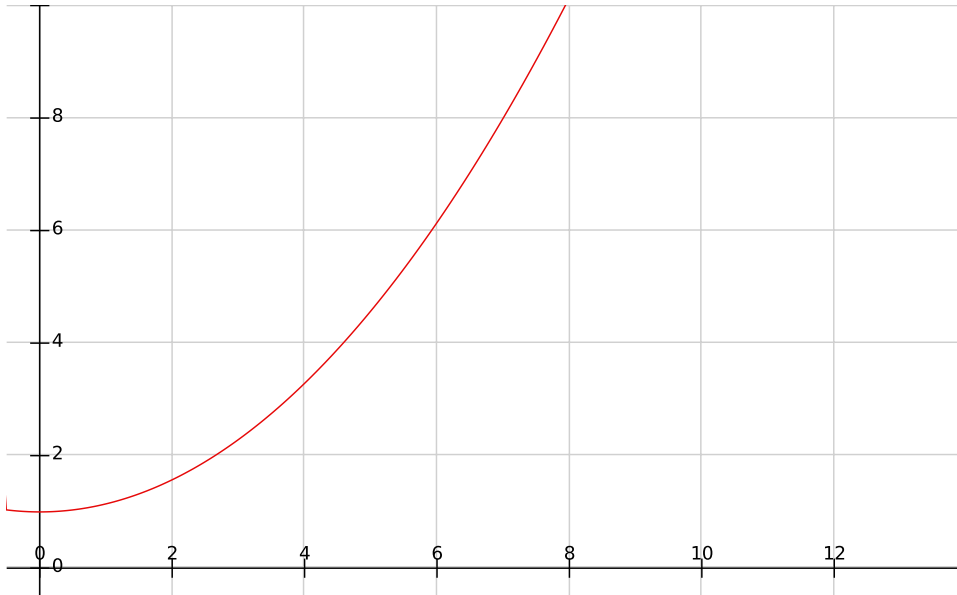
Ex. Consider the DTDS $x_{t+1} = -\frac{1}{5}x_t^2 + 2x_t$. Cobweb this DTDS starting at $x_0 = 2$.



Next: solve for all fixed points, and classify them according to their stability.

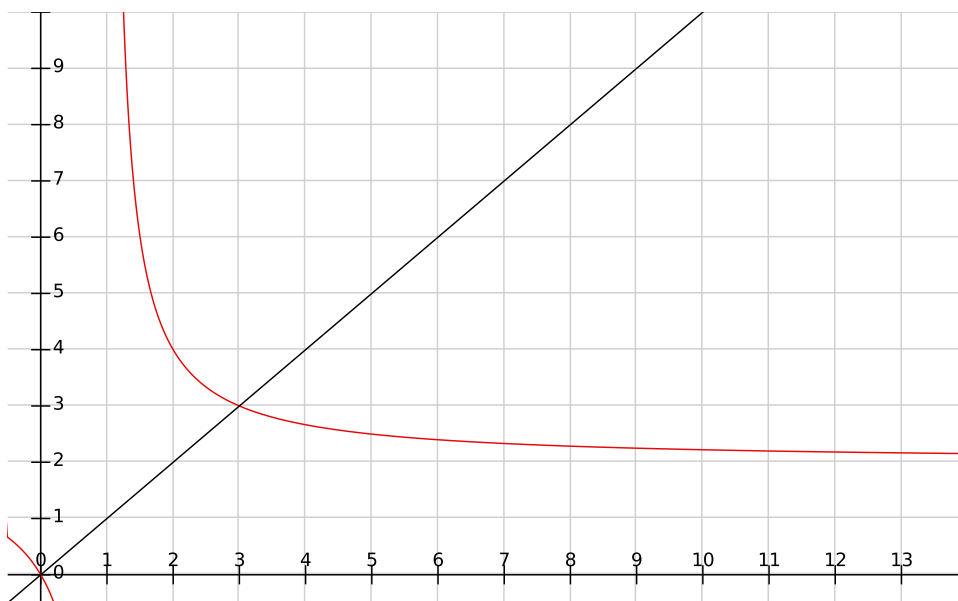
LEC 5 – Stability of Fixed Points.

3.2 like #14 (or 3.4 #16) Given the following graph of f , which is the updating function of a DTDS, determine the number of fixed points of the DTDS and determine their stability using cobwebbing. Write your conclusions in full sentences.



3.2 like #30 Find the equilibria of the following DTDS. Use cobwebbing to check each equilibrium for stability.

$$x_{t+1} = \frac{2x_t}{x_t - 1} \quad (x > 1).$$



3.3 #28 In 1990 there were about 5000 southern mountain caribou in BC. In 2009, only about 1900 remained. Assume the annual per capita decline is constant. How long until the population falls below $m = 500$ (which is a level, below which it is expected the species will go extinct)?

3.4 #14 Find all nonnegative equilibria of the following DTDS, where a is some real positive parameter:


$$x_{t+1} = \frac{x_t}{a + x_t}.$$

(Extra bizarre: what happens if $a = 0$?)

LEC 6 – Limits and Continuity.


- 4.2 (typical question) Sketch the graph and decide if the left-hand and right-hand limits at $a = 0$ exist, and then decide if the limit at $a = 0$ exists.

$$f(x) = \begin{cases} x + 1 & \text{if } x \leq 1 \\ x^2 & \text{if } x > 1 \end{cases}$$



- 4.2 like #13 Sketch the graph and decide if the left-hand and right-hand limits at $a = 0$ exist, and then decide if the limit exists.

$$f(x) = \begin{cases} |x + 1| + 1 & \text{if } x \leq 0 \\ |x - 2| & \text{if } x > 0 \end{cases}$$



Evaluate each of the following limits, showing all your steps:

$$4.2 \text{ \#48} \quad \lim_{x \rightarrow 0} \frac{x^2 - 3x}{x^3 - 9x}$$

$$4.2 \text{ \#48} \quad \lim_{x \rightarrow 4} \frac{\sqrt{x} - 2}{4 - x}$$

4.4 #36 Sketch the graph and discuss continuity of

$$f(x) = \begin{cases} \frac{x^2 - 4}{x - 2} & \text{if } x \neq 2 \\ 0 & \text{if } x = 2 \end{cases}$$

LEC 7 – Infinite Limits & Limits at Infinity.

Evaluate each of the following limits, showing all of your steps:

4.3 #12 $\lim_{x \rightarrow 1^+} \frac{x}{x^2 - 1}$

4.3 #14 $\lim_{x \rightarrow -7^+} \sqrt{\frac{1}{x + 7}}$

4.3 #36 $\lim_{x \rightarrow \infty} 0.7^x$

4.3 #43 $\lim_{x \rightarrow \infty} \frac{x^3 - 6x + 4}{3 - x^3}$

4.3 like #45 $\lim_{x \rightarrow \infty} \frac{(x-1)(x-3)(x-5)}{x^2-4}$

4.3 #50 $\lim_{x \rightarrow -\infty} \ln(3-x^3)$

4.4 # 6 Find a formula for a function $g(x)$ that makes the composition $\sin(g(x))$ discontinuous at $x = \pi$.

Ex. (like Course Guide Lecture 7 question 7) Let $f(x) = \begin{cases} \frac{x^2 - 4x + 3}{(x - 1)^3} & \text{if } x \neq \pm 1 \\ x + b & \text{if } x = \pm 1 \end{cases}$

Find the limit of f as $x \rightarrow 1$ and as $x \rightarrow -1$. Is there a value of b that makes f continuous at $x = 1$? Is there a value of b that makes f continuous at $x = -1$?

LEC 8 – The Derivative: Definition & Basic Rules.

Let f be a function defined on an interval around x .

The **derivative** of f at x is, by definition,

if this limit exists.

The **derivative of $f(x)$ at a point a** is, by definition,

if this limit exists.

Using **the definition**, compute the derivative of each of the following functions:

a. $f(x) = 2 + \sqrt{3x + 1}$

b. $g(x) = \frac{3}{4 + 2x}$

c. $h(x) = \sqrt{x^2 + 1}$

Using the rules of differentiation and simplifications where appropriate, compute the derivative of each of the following:

a. $\left(\frac{x^3}{x+1}\right)^{1/3}$

b. $\frac{x^2 + \sqrt{x}}{x^3}$

c. $f(x) = \frac{1}{x^2 + 1}$

d. $g(x) = \frac{2}{x - 3}$

Ex. Discuss the differentiability of each of the following piece-wise functions and compute their derivatives if possible.

a. $f(x) = \begin{cases} 2x + 2 & \text{if } x > 5 \\ 2x - 3 & \text{if } x \leq 5. \end{cases}$

b. $g(x) = \begin{cases} x^2 & \text{if } x \geq 0 \\ x^3 & \text{if } x < 0. \end{cases}$

Ex. Suppose functions f and g are differentiable, and the following table of values is given.

x	$f(x)$	$f'(x)$	$g(x)$	$g'(x)$
0	1	2	1	3
1	0	1	2	4
2	4	2	1	3
3	2	4	0	2
4	1	3	4	1

Determine the values of, and the derivatives of $f(x)g(x)$ and of $f(g(x))$, at the points $x = 0, 1, 2, 3, 4$.

LEC 9 – Exponential & Log Derivatives.

5.1 #30 Let $g(t) = \sqrt{t}(t^2 - t - 1)$. Find $g'(t)$.

5.1 #36 Let $f(t) = 2^{-4} + t^{-4} + e$. Find $f'(t)$.

5.1 #43 Find the equation of the tangent line to $y = f(x) = \sqrt[3]{x}$ when $x = 8$.

Differentiate:

5.2 #10 $g(x) = ax^{3/4}e^{x-2}$

5.2 #18 $f(x) = \frac{2\sqrt{x}(x-1)e^{-x}}{9}$

Differentiate:

5.2 #24 $G(x) = \frac{(1+x)(2+x)}{(3+x)}$

5.2 #27 $g(t) = \frac{e^t - 2t}{e^t + t}$

5.2 #40 Find $f'(0)$ if $f(x) = \frac{1+x^2}{e^x}$.

5.3 #4 Let $F(x) = \ln(x + \ln(x))$. Find $F'(x)$.

Differentiate each of the following:

5.3 #10 $f(x) = x^2 \ln(x)$

5.3 #12 $F(y) = \frac{\ln(y)}{e^y}$

Differentiate each of the following:

5.3 #25 $f(x) = \sqrt{2 - \frac{x}{x-2}}$

5.3 #34 $f(x) = \ln x^4 + \ln^4 x$

5.3 #41 Let $L(x) = \ln(\sqrt{\ln(x)})$. Find $L'(x)$.

5.3 #30 Let $h(x) = 2^x 3^x$. Find $h'(x)$.

Differentiate:

$$g(x) = 2^x 3^{x^2}$$

$$f(x) = 2^x + 3^x$$

$$L(x) = 2^x 3^{-x}$$

Differentiate:

Ex. $F(x) = (2^x)^{\ln(x)}$

bonus! $f(x) = x^x$.

LEC 10 – Trig, Inverse Trig & Implicit Differentiation.

5.3 #45 Let $F(x) = f(g(x))$ and let $H(x) = f(x)g(x)$.

If $g'(6) = -2$, $g(6) = 4$, $f(4) = \frac{1}{2}$, $f(6) = 5$, $f'(4) = 3$, and $f'(6) = 7$, find $F'(6)$ and $H'(6)$.

5.3 #49 Differentiate $f(x) = (1 + x)^{2+x}$

5.3: #34 Compute the derivative of $\sec(x)$ by first writing it in terms of $\sin(x)$ or $\cos(x)$.

5.3 #2 Find $g'(x)$ if $g(x) = \cos(x) + \cos(1)$

5.3 #4 Differentiate $f(x) = \sin(x) + \sin(2x) + \sin^2(x)$

Ex. Differentiate $h(x) = \cos^2(x^2)$

5.3 #12 Differentiate $f(x) = x \sec(x) + x \tan(x)$

5.3 #17 Find $f'(x)$ if $f(x) = \cos(\ln(x)) + \ln(\cos(x))$

5.3 #22 Differentiate $g(u) = \frac{\sin(u) + \cos(u)}{\sin(u) - \cos(u)}$

5.3 #26 Differentiate $f(x) = e^{\cos(x)}$

5.3 #29 Differentiate $f(x) = 2^{3 \tan(x)}$

5.3 #38 Find the equation of the tangent line to the graph of $f(x) = 1 + 2 \sin(e^x)$ at the point where $x = 0$.

5.3 like #50 Let $f(x) = \arctan(2x - 1)$. Find $f'(x)$.

5.3 #52 $g(x) = x^2 \arcsin^2(x)$

5.3 #54 Find $\frac{dy}{dx}$ if $y = (\arctan(x^2) + 1)^3$

5.3 #56 Find $\frac{dy}{dx}$ if $y = \arcsin(\sqrt[3]{x}) + \sqrt[3]{\arcsin x}$

5.5 (implicit differentiation) Suppose f is a function such that

$$f(x)e^x = xe^{f(x)}.$$

If $f(0) = 0$, find $f'(0)$.

5.5 #2 Given that y satisfies the following equation, use implicit differentiation to calculate y' .

$$e^{4x}y^4 - \sqrt{y} = 3x.$$

#8 If $f(x) - 2^{f(x)/2} = 4x$ and $f(0) = 2$, find $f'(0)$.

#14 Given the equation $\ln(f(x)) = \ln(x^{3x-4})$, find $f'(x)$.

bonus! #59 Differentiate $y = \arcsin(x) + \arccos(x)$.

LEC 11 – Graphing using Calculus.

Suppose a function $y = f(x)$, $-\infty < x < \infty$, is continuous, with continuous first and second derivatives. Assume it satisfies the following conditions:

- (1) $f'(x) < 0$ when $x < 0$, and $f'(x) > 0$ when $x > 0$
- (2) $f''(x) < 0$ when $x < -2$, and $f''(x) > 0$ when $x > -2$
- (3) $\lim_{x \rightarrow \infty} f(x) = \infty$, $\lim_{x \rightarrow -\infty} f(x) = 2$.
- (4) $f(0) = -3$, $f(-2) = -1$.

(a) Where is the graph of $f(x)$ decreasing?

(b) Where is the graph of $f(x)$ concave up?

(c) Where does $f(x)$ attain a local maximum or minimum?

(d) What are the asymptotes of f ?

(e) Sketch the graph of the function $y = f(x)$.

Ex. Consider the function $f(x) = \frac{1}{x^2} + \frac{1}{2x^3}$. Follow these steps to graph the function.

(a) Find the domain of f .

(b) Find the x -intercept(s) of f .

(c) Calculate the derivative of f .

(d) Find the critical point(s) of f .

(e) Calculate the second derivative of f .

(f) Find the point(s) of inflection.

(g) Find the limits $\lim_{x \rightarrow 0^\pm} f(x)$.

(h) Find the limits $\lim_{x \rightarrow \pm\infty} f(x)$.

(j) Sketch the graph of f for $x \in [-2, 2]$,

LEC 12 – Extreme values.

Course Guide Lec 12: Question 1:

Find all local and global maxima and minima of the function $f(x) = \frac{1}{4}x^4 - \frac{1}{3}x^3 - \frac{15}{8}x^2 + \frac{2}{3}$ on the interval $[-3, 3]$.

Course Guide Lec 12: Question 4:

Find the global maximum and minimum of the function $f(x) = \frac{x^2 + 2x}{e^x}$ on the interval $x \in [0, 4]$.

Course Guide Lecture 13, Question 9:

The oxygen concentration in a lake over a single day is given by the equation

$$C(t) = 10t^3 - 120t^2 + 210t + 12000,$$

where time, $0 \leq t \leq 24$, is measured in hours. When is the oxygen concentration highest? When is it lowest? What are the maximum and minimum values?

6.1 # 65 The Shannon Index measures the diversity of a species in an ecosystem. In the case of two species, it is defined by $H = -a \ln(a) - b \ln(b)$, where a is the percentage of species A and b is the percentage of species B . If there are just the two species, what is the maximum value and when does it occur? What does this mean in terms of the diversity of species in the ecosystem?

LEC 13 – Optimization.

Course Guide Lec 13: Question 1:

A company harvests fish at some rate $h \geq 0$. The yield is $Y(h) = h(500 - h)$ tons of fish, the selling price is \$200 per ton. The cost for harvesting at rate h is $C(h) = 1000h(1 + 0.1h)$ in dollars.

(a) Find the expression of the profit P (= revenue - cost) as a function of harvesting rate.

(b) Find the harvesting rate that maximizes profit.

(c) Find the maximum profit.

Course Guide Lecture 13: Question 6:

Find the point on the parabola $y = x^2$ that is the closest to the point $(1, 2)$ in the cartesian plane.

6.2 #22 Calculate the maximum long-term harvest for a population satisfying the DTDS

$$N_{t+1} = \frac{rN_t}{1 + kN_t} - hN_t.$$

Suppose that $r = 1.5$ and $k = 1$.

(a) Find the equilibria as a function of h .

(b) What range of h is associated to a positive equilibrium?

(c) Find the harvest level giving maximum long-term harvest $Y(h)$

(d) Sketch the graph of $Y(h)$ and compute the max value.

LEC 14 – L'Hopital's Rule.

Evaluate each of the following limits:

a. $\lim_{x \rightarrow 0} \frac{e^x - 1 - x}{\cos(x) - 1}$

b. $\lim_{x \rightarrow 1} \frac{3(x - 1)^2}{e^{2x-2} - x^2}$

c. $\lim_{x \rightarrow 1^+} \frac{3x^2}{e^{2x-2} - x^2}$

d. $\lim_{x \rightarrow 0} \frac{\arctan(x)}{x}$

e. $\lim_{x \rightarrow \infty} \frac{e^x - 2}{3 - 2e^x}$

f. $\lim_{x \rightarrow 0} \frac{\sin(x) - x}{x^3}$

g. $\lim_{x \rightarrow 0} \frac{1 - e^x}{1 - e^{x/2}}$

h. $\lim_{x \rightarrow (\pi/2)^+} \frac{\cos(x)}{(x - \pi/2)^2}$

i. $\lim_{x \rightarrow \infty} \frac{\ln(x^6)}{x^6}$

j. $\lim_{x \rightarrow \pi} \cot^2(x)(x - \pi)^2$

k. $\lim_{x \rightarrow 0^-} -x^{-2}e^{1/x}$

l. $\lim_{x \rightarrow -\infty} x^2 e^x$

m. $\lim_{x \rightarrow \infty} x^3 e^{-x^2}$

n. $\lim_{x \rightarrow \infty} x \tan\left(\frac{1}{x}\right)$

o. $\lim_{x \rightarrow \infty} \left(\sqrt{x^2 + x} - \sqrt{x^2 - 2x} \right)$

p. $\lim_{x \rightarrow 0^+} \left[\frac{1}{x} - \frac{\ln(1+x)}{x^2} \right]$

q. $\lim_{x \rightarrow \infty} (\sqrt{x-1} - \sqrt{x+3})$

r. $\lim_{x \rightarrow \infty} (xe^{\frac{1}{x}} - x)$

s. $\lim_{x \rightarrow \infty} (x + 3)^{1/x}$

t. $\lim_{x \rightarrow \infty} (\ln x)^{1/x}$

u. $\lim_{x \rightarrow 0} (1 + 2x)^{\frac{1}{x}}$

$$\text{v. } \lim_{x \rightarrow \infty} \left(\frac{x}{x+1} \right)^x$$

$$\text{w. } \lim_{x \rightarrow 0^+} (\sin x)^{\tan x}$$

Course Guide Question 9: Consider the function $f(x) = 1 + \sin(2x - 2)$.
(a) Use a linear approximation of f to estimate the value of $f(0.9)$.

(b) Justify from the graph of f why the approximation of $f(0.9)$ in (a) is below the actual value.

(c) Use a Taylor polynomial of degree 3 to approximate $f(0.9)$.

LEC 16 – Stability of DTDS.

Recall this important theorem!

The Stability Theorem (Derivative Test for Stability) Suppose x^* is a fixed point (equilibrium) of a DTDS $x_{t+1} = f(x_t)$. Then the fixed point x^* is

- stable if $|f'(x^*)| < 1$
- unstable if $|f'(x^*)| > 1$

Course Guide Question 3: The density of fish (i.e. number of fish per cubic metre) in a lake is determined by the discrete-time dynamical system

$$x_{t+1} = \frac{4x_t}{1 + 3x_t^2}$$

where t is the time in years since the beginning of the observation. Initially, the density is $x_0 = 0.5$.

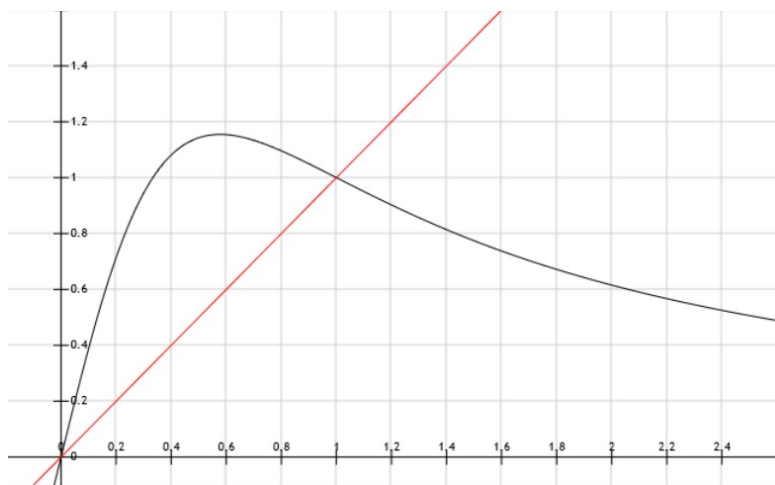
(a) What will the density be after three years? (4 decimal places are enough)

(b) What is the updating function $f(x)$?

(c) What are the biologically relevant equilibria?

(d) Use the derivative test to determine the stability properties for each of the two equilibria.

bonus! Below is a graph of the updating function for the above DTDS. Use cobwebbing to verify your answers from part (d).



Course Guide Question 4 Consider the DTDS $x_{t+1} = f(x_t)$, where the updating function is $f(x) = \frac{1+x}{1+x^2}$.

(a) Find the equilibrium point(s).

(b) Use the derivative test to evaluate the stability of each equilibrium point.

(c) Starting from $x_0 = 5$, calculate x_1, x_2, x_3 .

(d) Sketch the graph of the updating function and use cobwebbing to confirm your calculations.

Course Guide Question 4 Consider the DTDS $x_{t+1} = f(x_t)$, where the updating function is

$$f(x) = \frac{5x}{1 + 4x^2}.$$

(a) Find the equilibrium point(s).

(b) Use the derivative test to evaluate the stability of each equilibrium point.

(c) Starting from $x_0 = 5$, calculate x_1, x_2, x_3 .

(d) Sketch the graph of the updating function and use cobwebbing to confirm your calculations.

Course Guide Question 4 Consider the DTDS $x_{t+1} = f(x_t)$, where the updating function is $f(x) = rxe^{-x}$ where r denotes a positive parameter.

(a) Find the equilibrium point(s).

(b) Use the derivative test to evaluate the stability of each equilibrium point.

(c) Now suppose $r = 3$. Starting from $x_0 = 5$, calculate x_1, x_2, x_3 .

(d) Using your Calculus skills, again with $r = 3$, sketch the graph of the updating function and use cobwebbing to confirm your calculations.

Course Guide Question 4 Consider the DTDS $x_{t+1} = f(x_t)$, where the updating function is

$$f(x) = \frac{2x}{1 + 0.1x}.$$

(a) Find the equilibrium point(s).

(b) Use the derivative test to evaluate the stability of each equilibrium point.

(c) Starting from $x_0 = 5$, calculate x_1, x_2, x_3 .

(d) Sketch the graph of the updating function and use cobwebbing to confirm your calculations.

LEC 17 – Newton’s Method.

Recall: The **Intermediate Value Theorem** says that if f is continuous on a closed interval $[a, b]$ and y is between $f(a)$ and $f(b)$ then there is an $x \in [a, b]$ such that $f(x) = y$.

Recall: Newton’s method:

$$x_{n+1} = x_n - \frac{f(x_n)}{f'(x_n)}$$

Course Guide Question #5: Complete the following steps to estimate the solution of the equation

$$\sin\left(x + \frac{\pi}{2}\right) = \frac{x}{2}$$

(a) Use the Intermediate Value Theorem to explain why we know that there is a solution between 0 and $\frac{\pi}{2}$.

(b) Perform three iterations of Newton’s method with the initial value $x_0 = \frac{\pi}{4}$ (use 8 decimal places).

Course Guide: Question 2: Consider the DTDS $N_{t+1} = \ln(3 - N_t^2)$. (a) Use the Intermediate Value Theorem to show that there is an equilibrium in the closed interval $[0, 1]$.

(b) Use Newton's method to solve for the equilibrium up to four iterations using the initial guess 1. Please give decimal 4 points for your calculation.

Course Guide: Question 4: The goal of this question is to show that the function $f(x) = x^3 + x^2 + 3x + 2$ for $x \in (-\infty, \infty)$ has exactly one zero.

(a) Use the intermediate value theorem to show that there exists (at least) one zero.

(b) Use the Mean Value Theorem to show that if there are two (or more) zeros, then there is at least one critical point.

(c) Show that the function f does not have a critical point.

(d) Put all your arguments together to show that the function has exactly one zero.

(e) Find the root, accurate to 3 decimal places, using Newton's method.

LEC 18 – Antiderivatives.

Compute the following:

$$\int \sin(x) dx$$

$$\int x^3 dx$$

$$\int \cos(x) dx$$

$$\int \sqrt{x} dx$$

$$\int \sec^2(x) dx$$

$$\int 17x^2 dx$$

$$\int \sec(x) \tan(x) dx$$

$$\int \frac{31}{x^2} dx$$

$$\int \frac{1}{1+x^2} dx$$

$$\int \frac{8}{x} dx$$

$$\int \frac{1}{\sqrt{1-x^2}} dx$$

$$\int 7e^x dx$$

Find the following indefinite integrals.

$$(a) \int \frac{(1 + \sqrt{x})^2}{x^2} dx$$

$$(b) \int \frac{(t + 1)^2}{2t^3} dt$$

$$(c) \int \frac{(\sqrt{x} + 2)^2}{x^2} dx$$

$$(d) \int \frac{(2-x)^2}{x} dx$$

$$(e) \int \left(10x^4 - \frac{2}{x} + \frac{4}{\sqrt[3]{x}} - 1 \right) dx$$

Find the value of $F(1)$ when $F(0) = 1$ and $F'(t) = f(t)$ is given by $f(t) = 3t^3 + 1$.

7.1 #2,4,6 Which of the following differential equations are pure-time? Which are autonomous?

$$dy/dt = 2y$$

$$y' = 2xe^x$$

$$df/dx = \ln(x) + x - 1$$

$$df/dt = 3t^3 f(t)$$

7.2 #42 Suppose organisms grow in mass according to the differential equation

$$\frac{dM}{dt} = \alpha t^n.$$

where M is measured in grams and t in days. Suppose $n = -1/2$ and $\alpha = 2$.

(a) Find the units of α .

(b) Suppose $M(0) = 5$ g. Find the solution.

(c) Sketch the graphs of $M(t)$ and $M'(t)$.

(d) Describe your results in words.

LEC 19 – Substitution.

1. $\int (17x - 17)^{17} dx.$

2. $\int \sqrt[3]{12x + 2014} dx.$

3. $\int \frac{t}{(1 + t^2)^2} dt$

4. $\int \frac{(\ln(x))^3}{x} dx$

5. $\int \frac{3x + 1}{(3x^2 + 2x + 1)^6} dx$

6. $\int \sin(x)e^{\cos(x)} dx$

7. $\int \frac{\cos(x)}{\sqrt{\sin(x)}} dx$

8. $\int 5^{2x-3} dx.$

9. Find $\int \frac{5}{1+9x^2} dx.$

[Hint: differentiate $g(x) = \arctan(x).$]

$$10. \int \frac{(\ln(x))^3}{3x} dx$$

$$11. \int \frac{3x + 1}{(3x^2 + 2x + 1)^6} dx$$

$$12. \int \frac{t}{(1 + t^2)^2} dt$$

$$13. \int \frac{e^x}{e^x + 1} dx$$

$$14. \int \frac{(\ln(z))^2}{z} dz$$

$$15. \int \frac{\sin(\frac{1}{x})}{x^2} dx$$

16. $\int e^{3x} \sqrt{2 - e^{3x}} dx$

17. Find the value of $F(1)$ when $F(0) = 1$ and $F'(t) = f(t)$ is given by

(a) $f(t) = \frac{1}{17t + 12}$

(b) $f(t) = 12e^{2t}$

18. Find the following indefinite integrals

(a) $\int \frac{\tan(x)}{\ln(\cos(x))} dx$

(b) $\int \sin(x)e^{\cos(x)} dx$

(c) $\int \frac{\cot(x)}{\ln(\sin(x))} dx$

$$(d) \int \frac{\cos(\ln(x))}{x} dx$$

$$(e) \int \frac{e^x + 1}{e^x + x} dx$$

$$(f) \int \frac{\sin(x)}{1 + \cos^2(x)} dx$$

$$(g) \int \frac{\cos(x)}{(\sin^2(x))^{1/3}} dx$$

$$(h) \int \cos(x)e^{\sin(x)} dx$$

$$(i) \int \frac{e^x + 2}{e^x + 2x} dx$$

$$(j) \int \frac{(\ln(x))^3}{x} dx$$

$$(k) \int \left(\frac{2}{x(1 + \ln(x))} \right) dx$$

$$(1) \int \frac{\cos(x)}{\sqrt{\sin(x)}} dx$$

19. Find the anti-derivative $F(x)$ of $f(x) = \frac{e^{\arcsin(x)}}{\sqrt{1-x^2}}$ such that $F(0) = 1$.

LEC 20 – Integration By Parts.

1. $\int 16x^3 \ln(7x) dx$

2. $\int \arcsin(x) dx.$

3. $\int 3x^2 \cos(0.5x) dx$

4. Find the value of $F(1)$ when $F(0) = 1$ and $F'(t) = f(t)$ is given by $f(t) = (t + t^2)e^{-t}$.

5. Find the function $f(x)$, such that $f''(x) = \ln(x)$ and $f(1) = f'(1) = 0$.

6. Find the following indefinite integrals.

(a) $\int (x + 1) \sin(x) dx$

(b) $\int x^2 \cos(x) dx$

(c) $\int x^2 \ln(x^2) dx$ (Hint: can you simplify first?)

7. Find the indefinite integral of each of the following functions. Check your results by differentiating.

(a) $f(x) = \frac{x}{2} \cos(5x)$

(b) $f(x) = \sqrt{x} \ln x$

(c) $f(x) = \sin(x) \cos(x)$ (Hint: this one takes special effort to do by parts. Other methods are easier!)

(d) $f(x) = x3^x$

(e) $f(x) = x^2 e^{-x}$

8. Find the value of $F(1)$ when $F(0) = 1$ and $F'(t) = f(t)$ is given by $f(t) = 3t \cos(t^2)$.

9. Find the following indefinite integrals

(a) $\int x \ln(x) dx$

(b) $\int e^x \sin(x) dx$ (Hint: this one takes special effort.)

(c) $\int (x + 1) \cos(x) dx$

(d) $\int (x + 1) \ln(x) dx$

(e) $\int (x - 2) \sin(x) dx$

(f) $\int \sqrt[3]{x} \ln(x) dx$

10. Let $V(t)$ be the volume of a benign tumour in cm^3 after t years. For $t \geq 0$, suppose that $V(t)$ satisfies the following differential equation

$$\frac{dV}{dt} = (1 + t)e^{-t}.$$

- a. If initially $V(0) = 1$, find $V(t)$.

- b. Compute $\lim_{t \rightarrow \infty} V(t)$ and interpret.

- c. Use Newton's method to find when the volume of the tumour will be 2 cm^3 . Use 5 decimal places in your computations and find the answer with 3 decimal places of precision.

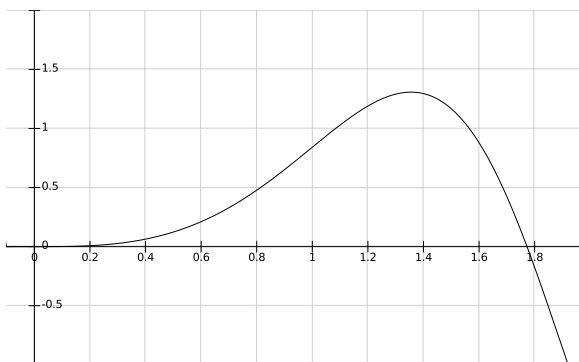
LEC 21 – Definite Integrals.

1. $\int_0^{\pi} \sin(x) dx$

Sketch the graph of $y = \sin(x)$ and shade in the region(s) whose exact **net area** corresponds to the definite integral $\int_0^{\pi} \sin(x) dx$. Write + or – signs within each region to indicate whether the region's area would be added or subtracted, respectively.

2. $\int_0^{\sqrt{\pi}} 3t \sin(t^2) dt$

Here's the graph of $y = 3t \sin(t^2)$. The answer you got for the definite integral $\int_0^{\sqrt{\pi}} 3t \sin(t^2) dt$ represents an exact **net area** on the graph below. Shade in the corresponding region(s). Write + or - signs within each region to indicate whether the region's area would be added or subtracted, respectively.



3. $\int_0^{\pi} t \sin(t) dt$

Here's the graph of $y = t \sin(t)$. The answer you got for the definite integral $\int_0^{\pi} t \sin(t) dt$ represents an exact **net area** on the graph below. Shade in the corresponding region(s). Write + or - signs within each region to indicate whether the region's area would be added or subtracted, respectively.

